

## C3 – Intro to Actuators Procedure

Deliverables: Signed score sheet, motor mount with holes drilled

### Overview

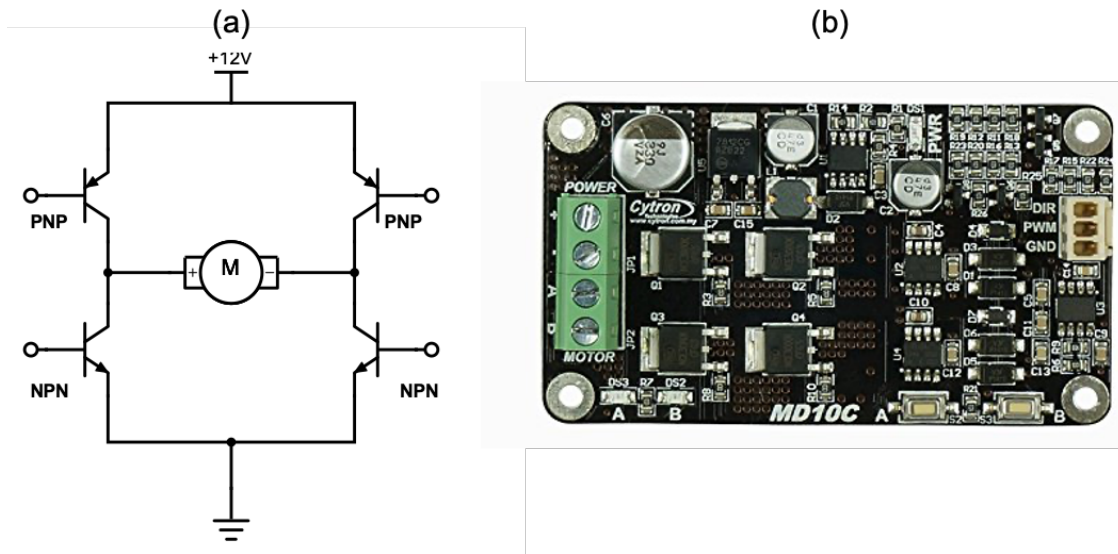
In this lab, you will learn how to implement several common mechanical actuators: DC motors, servos, stepper motors, solenoid valves, and pneumatic cylinders.

### Station A: DC Motors

#### Background

There are many different types of DC motors. In this lab, you will use a 12V geared motor.

The H-bridge circuit shown in Fig. 2a is similar to the single MOSFET PWM circuit you used in the previous lab. By using four MOSFETS, it allows the motor to spin in either direction with speed controlled by PWM. This circuit is the basis of any DC motor driver board, such as the Cytron MD10C that will be used in this lab.



**Figure 1** – (a) An H-bridge circuit uses four transistors to control which direction the motor will spin. (b) A Cytron MD10C motor driver board contains an H-bridge circuit that allows for direction and speed control.

### Part 1 – Mechanical Assembly

1. Unscrew the two screws from the front of the motor, and remove the cover off gearbox. Place the screws somewhere safe. Be careful not to get grease everywhere!
2. Examine the gears. Do you know what type of gear box this is?
3. Replace the gearbox and tighten the two long screws.
4. Locate the 12V DC power supply; it looks like a laptop charger. Connect the motor to the 12V DC power supply to test that it still works.
5. Attach the mounting plate to the 80-20 rail using screws and T-nuts provided.
6. Mount the DC motor to the plate.
7. Mount the pulley to the shaft. Tighten the set screw onto the flat part of the shaft.

### Part 2 – Motor Driver Board

1. Locate the 12V DC power supply (not the one on the breadboard); it looks like a laptop charger. Make sure it is NOT plugged in to the AC wall outlet yet.
2. Use red and black jumper wires to connect the 12V DC power supply to the + and – screw terminals on the Cytron motor driver board.
3. Connect the DC motor wire to the A and B screw terminals on the Cytron.
4. Make the following connections with the Arduino and Cytron:
  - a. Arduino Digital GND → Cytron GND
  - b. Arduino Digital Pin 5 → Cytron DIR
  - c. Arduino Digital Pin 3 → Cytron PWM
5. Download and open the Arduino sketch “Cytron\_template.ino”. Save it to your C3 folder with a new filename.
6. Open the code and examine it line by line. Fill in the “\*\*\*” in the main loop as either HIGH or LOW in the code.
7. Plug the 12V DC power supply into the wall outlet and run the code. When you have the code working, **demonstrate it to the lab instructor to receive credit.**
8. Make sure you have the Arduino sketch saved in the C3 folder of your code library. You will need it for future labs.
9. Return the lab bench to its initial state. Disassemble the motor mounting bracket and circuit.

## Station B: Stepper Motors

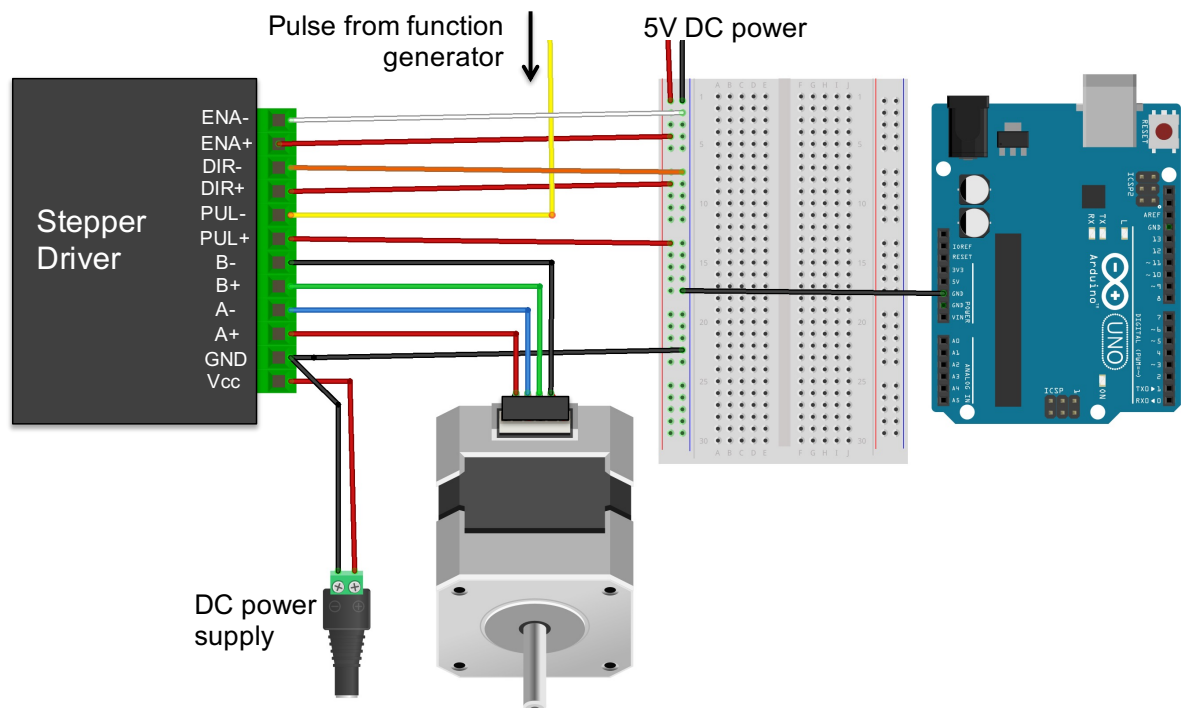
### Background

A stepper motor is very different from the previous DC motors. It uses multiple coils of wire that are sequentially switched ON and OFF by a “stepper driver” circuit. A permanent multi-pole magnet is fixed around the motors shaft. Turning a coil ON will cause the multi-pole magnet to rotate and align with the coil. Turning that coil OFF and its neighboring coil ON causes the magnet to rotate.

### Part 1 – Mechanical Assembly

1. The stepper motor is a standard “NEMA 23” stepper motor, which means the motor case is 2.3” wide. Write this down in your lab notebook.
2. Make sure everything is unplugged. Remove the four long screws from the front of motor using the short, fat screwdriver. Place the screws somewhere safe.
3. Remove the aluminum cover to reveal the coils and multi-pole magnet on the shaft.
4. Remove the shaft and magnet assembly. Use the screwdriver to push on the shaft from the backside. Be careful not to lose the “wave spring” on the bottom. Take a moment to admire the coils and multi-pole magnet.
5. Reassemble the motor. Replace the shaft assembly. (Don’t forget the wave spring!) Replace the aluminum cover and screws.

### Part 2 – Basic Operation



**Figure 2** – The stepper motor, stepper driver, and Arduino microcontroller are all connected to a breadboard. A 12V power supply will power the motor coils and a 5V power supply is used to power the digital logic.

1. The stepper motor is a standard “NEMA 17” stepper motor, which means the motor case is 1.7” wide. This motor has 200 steps per revolution. Write this down in your lab notebook.
2. This particular stepper motor has two sets of coils. Each coil has two wires connected to it. Determine which pairs of wires are connected to a given coil. Use the handheld DMM to measure the resistance between two wires. A coil will have a resistance less than 50 Ohms.
3. Write down which two color wires share a coil in your lab notebook. Connect each pair of motor wires to the A and B terminals of the stepper driver, as shown in Fig. 2.
4. Wire up the + and – bus lines on the large breadboard to its +5V power supply and ground.
5. Connect the following pins on the stepper driver to +5V on the breadboard: ENA+, DIR+, and PUL+.
6. Connect the following pins on the stepper driver to ground on the breadboard: ENA- and DIR-.
7. Locate the 12V DC power supply. (It looks like a laptop charger.) Make sure the 12V DC power supply is unplugged from the AC wall outlet.
  - a. Connect the kill switch and green screw terminal adapter, as you did in previous labs.
  - b. Connect the + terminal of the power supply to the VCC screw terminal on the stepper driver.
  - c. Connect the – terminal of the power supply to GND on the stepper driver.
8. Use a male pin jumper wire to connect the GND screw terminal on the stepper driver to ground on the breadboard. (You will have two wires screwed into GND on the stepper driver.)
9. Connect ENA- to +5V on the breadboard to enable the stepper. (Connecting it to GND (LOW) will disable the stepper driver. This is useful to conserve power and prevent the motor coil from becoming too hot.)
10. Use the function generator to drive the PUL- (pulse) pin. Remember, the black minigrabber always goes to ground. Start with a 600 Hz “Pulse” with a high value of 5V and low value of 0V.
11. Put a piece of masking tape on the shaft of the stepper motor so you can see it spin.
12. Plug the 12V DC power supply into the wall outlet. Turn on the output from the function generator. The shaft should begin to rotate.
13. Try different frequencies between 100 and 1600 Hz. Which frequency results in the smoothest operation of the stepper motor? Why do you think it is choppy at low and high frequencies?
14. Change the DIR- (direction) pin from ground to 5V on the breadboard. This should change the direction of rotation. **Demonstrate the working system to the lab instructor to receive credit on your score sheet.**
15. Disconnect the function generator and turn it off. Turn off the 12V DC power supply. Leave everything else connected to the breadboard.

16. Use the function generator to drive the PUL- (pulse) pin. Remember, the black minigrabber always goes to ground. Start with a 600 Hz “Pulse” with a high value of 5V and low value of 0V.
17. Put a piece of masking tape on the shaft of the stepper motor so you can see it spin.
18. Plug the 12V DC power supply into the wall outlet. Turn on the output from the function generator. The shaft should begin to rotate.
19. Try different frequencies between 100 and 1600 Hz. What frequency range results in the smoothest operation of the stepper motor?
20. Change the DIR (direction) pin from ground to 5V on the breadboard. This should change the direction of rotation.
21. Disconnect the function generator and turn it off. Leave everything else connected to the breadboard.

### Part 3 – Microcontroller Implementation

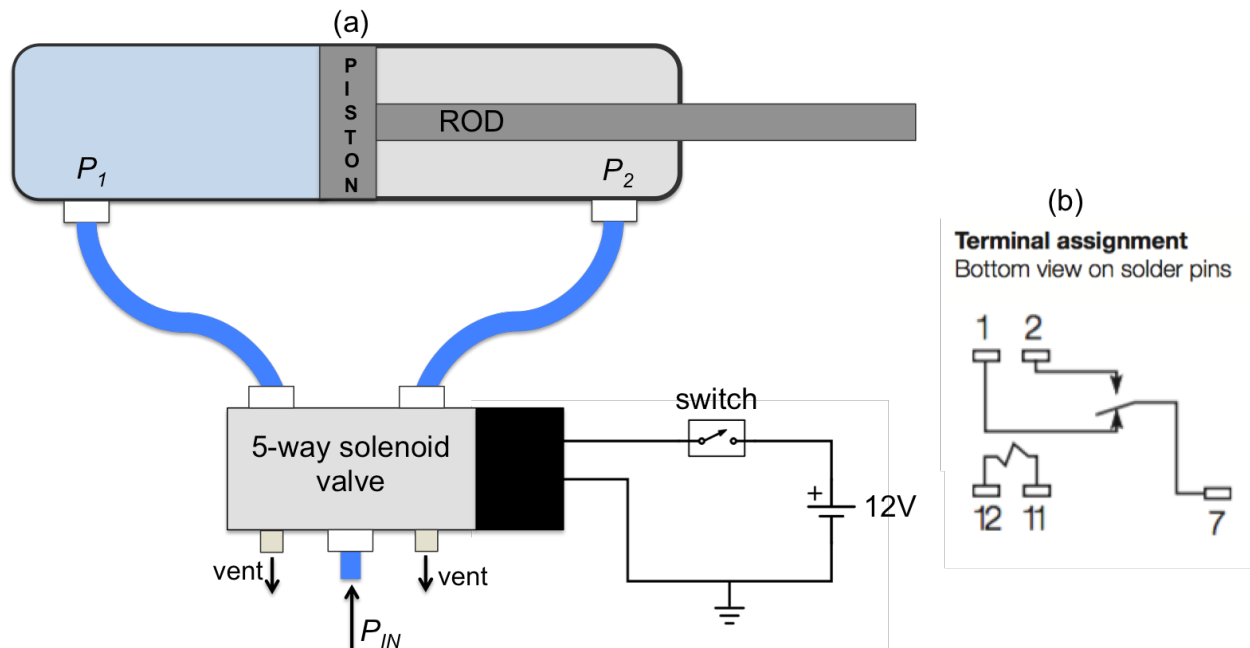
1. Disconnect the PUL- pin from the function generator.
2. Disconnect the DIR- pin from the breadboard.
3. Make the following connections with the Arduino:
  - a. Arduino Digital GND → grounded bus line on the breadboard
  - b. Arduino Digital Pin 8 → DIR- on stepper driver
  - c. Arduino Digital Pin 9 → PUL- on stepper driver
4. Download the Arduino sketch “EasyDriver\_Example1.ino”. Examine the code and try to understand what it will do.
5. Run the sketch on the Arduino. You should see the stepper motor spin.
6. Modify the code to make the stepper spin in the opposite direction. (Change the value assigned to the DIR- pin.)
7. Try replacing the delay() function with delayMicroseconds() for finer control of the stepping pulse frequency.
8. Write a program that will repeatedly rotate the shaft one full revolution clockwise, then one full rotation counter-clockwise. **Demonstrate it to the lab instructor to receive credit.**
9. Save all of your codes to the C3 folder in your code library.
10. Disconnect everything and return the set-up to its initial state.

## Station C: Pneumatic Actuators

**Safety glasses must be worn for this portion of the lab!**

### Background

A pneumatic cylinder uses pressure from a gas to drive a piston and rod, resulting in linear motion. Shown in Fig. 3, a 5-way solenoid valve is used to switch the compressed air  $P_{IN}$  between two outlets,  $P_1$  and  $P_2$ . When  $P_1 > P_2$ , the rod will extend to the right. The rod will retract to the left when  $P_1 < P_2$ . The valve also has two vents that allow the pressurized air to quickly leave the cylinder when switching occurs.



**Figure 2** – (a) A pneumatic cylinder is controlled by a 5-way solenoid valve. (b) The pin-out for the T81 SPDT relay. Pins 11 and 12 are connected to the relay “coil”.

### Part 1 – Assembly

1. **SAFETY FIRST:** You must wear safety glasses during the portion of the lab. Keep the cylinder a safe distance away from you head or body.
2. Connect the blue 6mm OD tubes using the push connectors, as shown in Fig. 3.
3. Mount the cylinder in the beaker clamp close to the base. Make sure it is very snug, because the recoil of the rod and piston will cause it to move quite a bit.
4. Open the quarter-turn ball valve to pressurize the system.
5. Press the blue button on the solenoid to manually actuate the cylinder. Pretty cool, huh?
6. Use the breadboard and toggle switch to construct the circuit shown in Fig. 3.
7. Test the circuit. Actuate the cylinder by flipping the toggle switch.

## Part 2 – Microcontroller Implementation

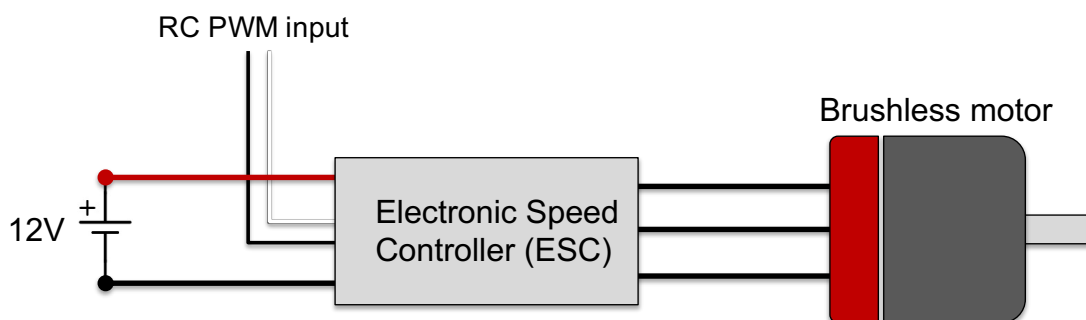
You will now use the Arduino and an electrical **relay** to switch the solenoid ON and OFF. The relay is similar to the MOSFET transistor: it is a three terminal device that allows large amounts of power to be controlled using a small voltage. The small voltage drives a magnetic **coil**, and the magnetic field of the coil mechanically actuates a switch to turn the current ON and OFF.

1. Replace the toggle switch with the relay. Refer to the pin-out for the relay, shown in Fig. 3b. (Pins 2 and 7 on the relay are equivalent to the two wires on the toggle switch.)
2. Connect the Arduino ground to the breadboard ground.
3. Use the Arduino to “energize” the relay coil. Connect a digital pin on the Arduino to one end of the relay coil (pin 11). Connect the other end of the coil (pin 12) to ground.
4. Create a new Arduino sketch and save it in the C3 folder of your code library.
5. In the Arduino code “setup”, declare the pin connected to the relay coil to be an output. In the main loop, write code to periodically actuate the cylinder every 3 seconds. That is, the cylinder should be extended for 3 seconds, then retracted for 3 seconds.
6. Demonstrate the code to the lab instructor to receive credit.
7. Make sure the Arduino sketch is saved to your code library.
8. Turn off the breadboard and disassemble the circuit.
9. Close the quarter-turn ball valve to depressurize the system. Remove all the blue tubes by pressing down on the black plastic ring at the base of the connectors.

## Station D: Brushless DC Motor

### Background

A brushless DC motor works similar to a stepper motor. It contains a series of electromagnetic coils that fire in succession causing permanent magnets connected to the shaft to spin. Unlike the stepper motor, the coils are driven by *3-phase power*. Each set of coil is driven by a separate AC sine wave, which are  $120^\circ$  out of phase with one another. Thus, the name “brushless DC motor” is a bit of a misnomer, because the motor actually runs on 3-phase AC sine waves. Shown below in Fig. 1, an *electronic speed controller (ESC)* is necessary to convert the 12V DC power to 3-phase AC power.



**Figure 4** – The brushless motor is connected to an ESC. The ESC takes in 12V power and a 50Hz digital pulse train, and outputs 3 phase power to the motor coils.

### *Procedure*

The brushless DC motor will be connected to the function generator. The ESC reads in a 50 Hz digital pulse with a width between 1000 – 2000  $\mu\text{s}$ . The width of the pulse tells the ESC what speed to turn the motor:

- 1000  $\mu\text{s}$  (1 ms) pulse width sets the angular speed to 0 RPM.
  - 2000  $\mu\text{s}$  (2 ms) pulse width turns sets the angular speed to its maximum value.
  - Any pulse width in between is linearly mapped to an angular speed between the two limits.
1. Connect the PWM input of the ESC to the function generator using male Dupont pin jumper wires. The yellow wire goes to the signal and the brown wire goes to ground.
  2. Use the function generator to produce the PWM signal via the “Pulse” function with a frequency of 50 Hz, a high value of 5V and low value of 0V.
    - a. Select the function type to be “Pulse” by pressing the “Pulse” button.
    - b. Press the “Amplitude/High” button. Set the “High Level” to 5V and the “Low Level” to 0V.
    - c. Press the “Frequency/Period” button, and set the frequency to 50 Hz.
    - d. Press the “Duty/Width” button and set the duty cycle to 10% (pulse width of 2000  $\mu\text{s}$ ).
  3. Connect the 3 wires on the brushless motor to the ESC. It does not matter what order you connect them in.
  4. Turn on the output of the function generator.
  5. Connect the thick red and black wires on the ESC to the 3S LiPo battery using the red Deans T adapters. You should here a few beeps from the motor.
  6. After the beeps, set the duty cycle to 5% (pulse width of 1000  $\mu\text{s}$ ). (This simulates an RC drone pilot turning the throttle down to a “safe position”.) You should here more beeps indicating that the motor is armed.
  7. Test the motor. Use the arrow keys below the big wheel knob to move the cursor over to adjust the duty cycle by 0.1% increments. Increasing the duty cycle should increase the angular speed, with 5% duty being completely OFF and 10% duty cycle being full throttle.
  8. Try swapping any two of the three motor cables. This should change the direction that the motor spins.
  9. **Demonstrate the working motor to the TA or lab instructor to receive credit.**
  10. Disconnect the ESC from the function generator, and turn off the function generator.

### **Data Analysis and Deliverables**

You do NOT have to write a tech memo for this lab.



## Appendix A

### Equipment

#### Station A

- 1ft x 1.5" 80-20 slotted rail
- Mounting plate with 5/16" T-nuts and bolts
- 12V DC motor
- 12V DC power supply (looks like a laptop charger)
- BNC to minigrabber cable
- M3 screws for motor mount
- Pulley w/ reflective tape
- Cytron MD10C
- Arduino Microcontroller

#### Station B

- Large breadboard
- 12V DC power supply (looks like a laptop charger)
- BNC to minigrabber cable
- Arduino Microcontroller
- Microstep stepper driver
- NEMA 23 stepper motor

#### Station C

- Large breadboard
- T81 SPDT relay
- Arduino Microcontroller
- Pneumatic cylinder
- Blue tubing
- Quarter turn ball valve

#### Station D

- Brushless DC motor
- Electronic speed controller (ESC) with Deans T connector
- 3S LiPo battery, 5200 mAh
- 3 ft banana-to-grabber cables (one black, one red)
- BNC-to-grabber cable